

### Frage Mathe


Berechne x:

$$x + 5 = 10$$

Antwort:

$$x = 5$$

sponsored by  
www.OberPrima.com



### Frage Mathe


Berechne x:

$$x + 57 = 100$$

Antwort:

$$x = 43$$

sponsored by  
www.OberPrima.com



### Frage Mathe


Berechne x:

$$x + 7 = 15$$

Antwort:

$$x = 8$$

sponsored by  
www.OberPrima.com



### Frage Mathe


Berechne x:

$$x + 3 = 122$$

Antwort:

$$x = 119$$

sponsored by  
www.OberPrima.com



### Frage Mathe


Berechne x:

$$x + 50 = 67$$

Antwort:

$$x = 17$$

sponsored by  
www.OberPrima.com



### Frage Mathe

Berechne x:

$$x - 5 = 10$$

Antwort:

$$x = 15$$

sponsored by  
www.OberPrima.com



### Frage Mathe


Berechne x:

$$x - 14 = 11$$

Antwort:

$$x = 25$$

sponsored by  
www.OberPrima.com



### Frage Mathe


Berechne x:

$$x - 4 = 7$$

Antwort:

$$x = 11$$

sponsored by  
www.OberPrima.com



### Frage Mathe

Berechne x:

$$x - 111 = 333$$

Antwort:

$$x = 444$$

sponsored by  
www.OberPrima.com



### Frage Mathe


Berechne x:

$$x - 12 = 128$$

Antwort:

$$x = 140$$

sponsored by  
www.OberPrima.com



### Frage Mathe


Berechne x:

$$2x + 5 = 10$$

Antwort:

$$x = 2,5$$

sponsored by  
www.OberPrima.com



### Frage Mathe


Berechne x:

$$3x + 5 = 125$$

Antwort:

$$x = 40$$

sponsored by  
www.OberPrima.com



### Frage Mathe


Berechne x:

$$1/2x + 5 = 10$$

Antwort:

$$x = 10$$

sponsored by  
www.OberPrima.com



### Frage Mathe


Berechne x:

$$4x + 12 = 60$$

Antwort:

$$x = 12$$

sponsored by  
www.OberPrima.com



### Frage Mathe


Berechne x:

$$5x + 5 = 80$$

Antwort:

$$x = 15$$

sponsored by  
www.OberPrima.com



### Frage Mathe

Berechne x:

$$3x - 5 = 10$$

Antwort:

$$x = 5$$

sponsored by  
www.OberPrima.com



### Frage Mathe

Berechne x:

$$10x + 50 = 100$$

Antwort:

$$x = 5$$

sponsored by  
www.OberPrima.com



### Frage Mathe


Berechne x:

$$10x - 5 = 100$$

Antwort:

$$x = 10,5$$

sponsored by  
www.OberPrima.com



### Frage Mathe


Berechne x:

$$4x + 8 = 32$$

Antwort:

$$x = 6$$

sponsored by  
www.OberPrima.com



### Frage Mathe


Berechne x:

$$6x - 40 = 100$$

Antwort:

$$x = 10$$

sponsored by  
www.OberPrima.com



### Frage Mathe


Berechne x:

$$14x - 14 = 126$$

Antwort:

$$x = 10$$

sponsored by  
www.OberPrima.com



### Frage Mathe


Berechne x:

$$14x - 28 = 112$$

Antwort:

$$x = 10$$

sponsored by  
www.OberPrima.com



### Frage Mathe


Berechne x:

$$14x + 28 = 196$$

Antwort:

$$x = 12$$

sponsored by  
www.OberPrima.com



### Frage Mathe


Berechne x:

$$14x - 14 = 196$$

Antwort:

$$x = 15$$

sponsored by  
www.OberPrima.com



### Frage Mathe


Berechne x:

$$7x - 16 = 61$$

Antwort:

$$x = 7$$

sponsored by  
www.OberPrima.com



### Frage Mathe

Berechne x:

$$3x - 7 = 26$$

Antwort:

$$x = 11$$

sponsored by  
www.OberPrima.com



### Frage Mathe

Berechne x:

$$11x - 5 = 72$$

Antwort:

$$x = 7$$

sponsored by  
www.OberPrima.com



### Frage Mathe


Berechne x:

$$6x - 13 = 35$$

Antwort:

$$x = 8$$

sponsored by  
www.OberPrima.com



### Frage Mathe


Berechne x:

$$8x - 17 = 187$$

Antwort:

$$x = 25$$

sponsored by  
www.OberPrima.com



### Frage Mathe

Berechne x:

$$7x - 5 = 30$$

Antwort:

$$x = 5$$

sponsored by  
www.OberPrima.com